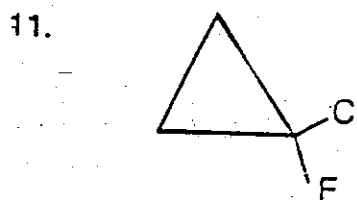
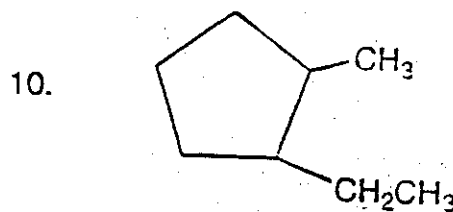
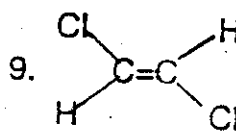
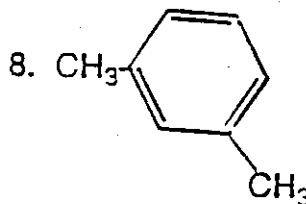
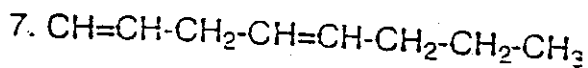
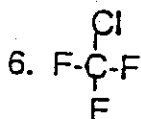
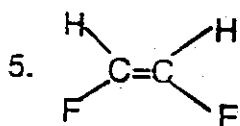
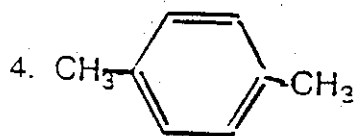
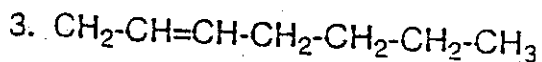
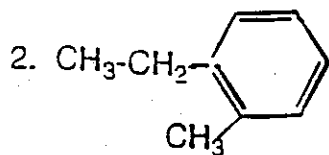
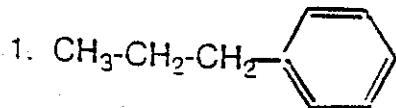


Name the Following Compounds:

Name _____
Date _____ Period _____



Draw the following compounds:

12. 4-methyloctane

13. 2,3-dimethyl - 1-hexene

14. 2-pentyne

15. *ortho*-dichlorobenzene

16. *cis*-1,2-dichloroethene

17. *trans*-1,2-dibromoethene

18. 1,3-heptadiene

19. *para*-dibromobenzene

20. Draw three isomers for octane on the back and then name them.