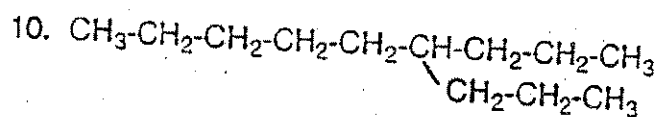
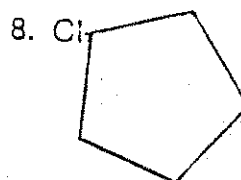
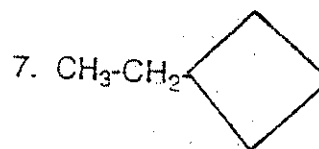
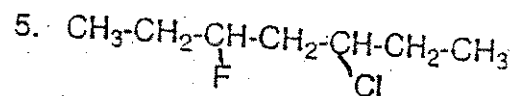
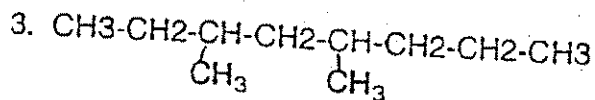
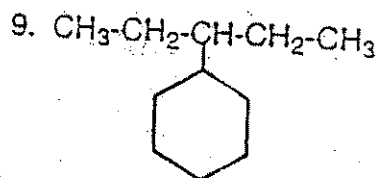
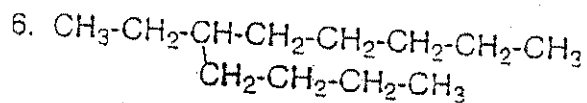
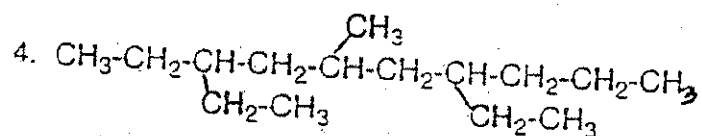
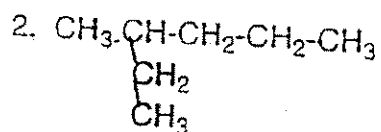
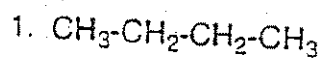


# Organic Nomenclature Practice WS

Name \_\_\_\_\_  
Period \_\_\_\_\_ Date \_\_\_\_\_

Name the following molecules



Draw the structures of the following molecules

11. ethane

12. 2-methylpentane

13. 2-chloropropane

14. 1-chloro-3-fluorohexane

15. 1-ethyl-3-propylcyclopentane

16. 2,4-dimethylheptane

17. 2,3-dimethyl-5-propyldecane

18. ethylcyclobutane

19. 2-pentene

20. 2-hexyne

Draw and name the isomers for  $C_6H_{14}$